



# Addition Exercises

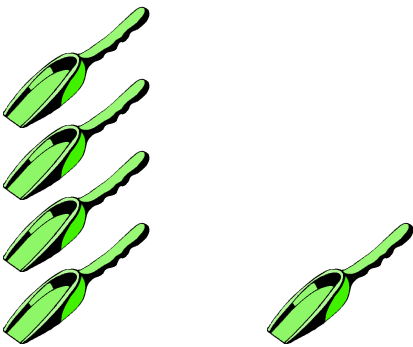
Solve the following exercises.



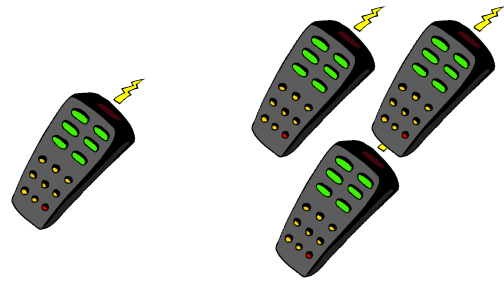
$$3 + 2 = \underline{\quad}$$



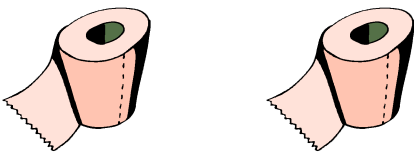
$$2 + 1 = \underline{\quad}$$



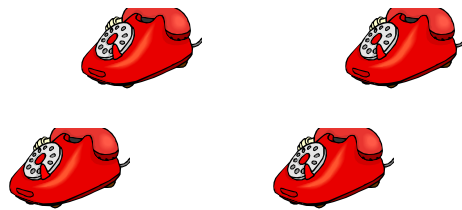
$$4 + 1 = \underline{\quad}$$



$$1 + 3 = \underline{\quad}$$



$$1 + 1 = \underline{\quad}$$



$$2 + 2 = \underline{\quad}$$